

Unit 2, Station 3, Round 3, Task 3




Fraction, Decimal

Name: **Answer Key**

Determine the value written as a fraction , decimal

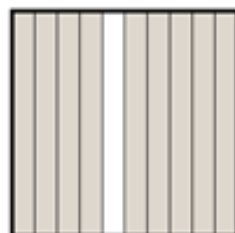
Answer

Ex)




Fraction $\frac{8}{10}$
Decimal 0.8

1)



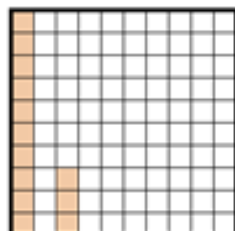
Fraction $\frac{9}{10}$
Decimal 0.9

2)




Fraction $\frac{82}{100}$
Decimal 0.82

3)



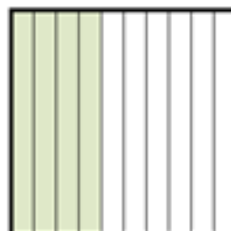
Fraction $\frac{13}{100}$
Decimal 0.13

4)



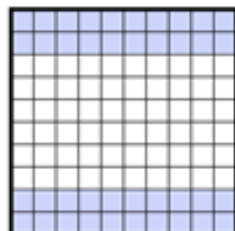
Fraction $\frac{3}{10}$
Decimal 0.3

5)



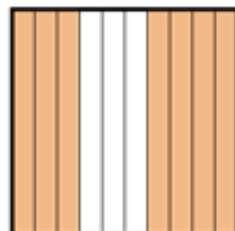
Fraction $\frac{4}{10}$
Decimal 0.4

6)



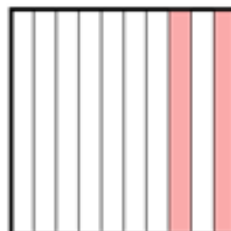
Fraction $\frac{40}{100}$
Decimal 0.40

7)




Fraction $\frac{7}{10}$
Decimal 0.7

8)




Fraction $\frac{2}{10}$
Decimal 0.2

9)




Fraction $\frac{60}{100}$
Decimal 0.60

10)



Fraction $\frac{28}{100}$
Decimal 0.28

11)



Fraction $\frac{65}{100}$
Decimal 0.65